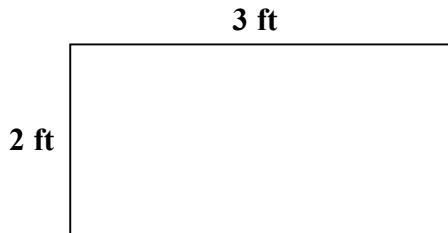


Skill: Find the Area and Perimeter of a rectangle (Mixed)

Set #1A

Instructions: Find the perimeter and area of each rectangle and write your answers.

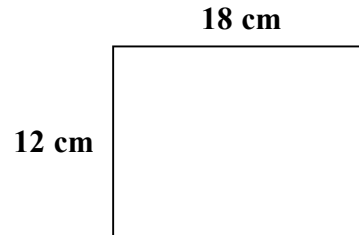
1.



A =

P =

2.



A =

P =

3. | L = 10 cm , W = 16 cm

A =

P =

8. | L = 36 cm , W = 7 cm

A =

P =

4. | L = 13 cm , W = 28 cm

A =

P =

9. | L = 12 ft , W = 43 ft

A =

P =

5. | L = 11 m , W = 12 m

A =

P =

10. | L = 7 cm , W = 48 cm

A =

P =

6. | L = 36 cm , W = 15 cm

A =

P =

11. | L = 18 m , W = 12 m

A =

P =

7. | L = 32 cm , W = 32 cm

A =

P =

12. | L = 26 ft , W = 37 ft

A =

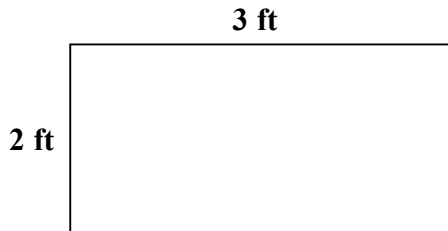
P =

Skill: Find the Area and Perimeter of a rectangle (Mixed)

Set #1A

Instructions: Find the perimeter and area of each rectangle and write your answers.

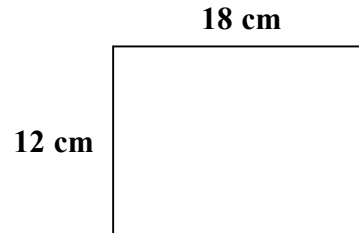
1.



$$A = 6 \text{ sq ft}$$

$$P = 10 \text{ ft}$$

2.



$$A = 216 \text{ sq cm}$$

$$P = 60 \text{ cm}$$

3. $L = 10 \text{ cm}, W = 16 \text{ cm}$

$$A = 160 \text{ sq cm}$$

$$P = 52 \text{ cm}$$

8. $L = 36 \text{ cm}, W = 7 \text{ cm}$

$$A = 252 \text{ sq cm}$$

$$P = 86 \text{ cm}$$

4. $L = 13 \text{ cm}, W = 28 \text{ cm}$

$$A = 364 \text{ sq cm}$$

$$P = 82 \text{ cm}$$

9. $L = 12 \text{ ft}, W = 43 \text{ ft}$

$$A = 516 \text{ sq ft}$$

$$P = 110 \text{ ft}$$

5. $L = 11 \text{ m}, W = 12 \text{ m}$

$$A = 132 \text{ sq m}$$

$$P = 46 \text{ m}$$

10. $L = 7 \text{ cm}, W = 48 \text{ cm}$

$$A = 336 \text{ sq cm}$$

$$P = 110 \text{ cm}$$

6. $L = 36 \text{ cm}, W = 15 \text{ cm}$

$$A = 540 \text{ sq cm}$$

$$P = 102 \text{ cm}$$

11. $L = 18 \text{ m}, W = 12 \text{ m}$

$$A = 216 \text{ sq m}$$

$$P = 60 \text{ m}$$

7. $L = 32 \text{ cm}, W = 32 \text{ cm}$

$$A = 1024 \text{ sq cm}$$

$$P = 128 \text{ cm}$$

12. $L = 26 \text{ ft}, W = 37 \text{ ft}$

$$A = 962 \text{ sq ft}$$

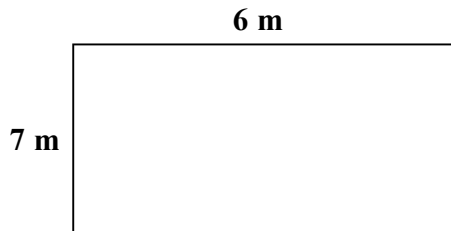
$$P = 126 \text{ ft}$$

Skill: Find the Area and Perimeter of a rectangle (Mixed)

Set #2A

Instructions: Find the perimeter and area of each rectangle and write your answers.

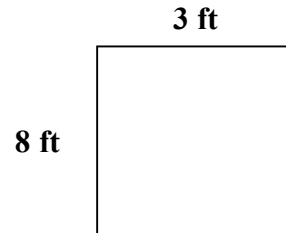
1.



A =

P =

2.



A =

P =

3. L = 4 m , W = 12 m

A =

P =

8. L = 9 ft. , W = 8 ft.

A =

P =

4. L = 10 ft. , W = 9 ft

A =

P =

9. L = 16 m , W = 15 m

A =

P =

5. L = 8 cm , W = 6 cm

A =

P =

10. L = 3 cm , W = 24 cm

A =

P =

6. L = 32 cm , W = 15 cm

A =

P =

11. L = 11 cm , W = 16cm

A =

P =

7. L = 26 ft , W = 22 ft

A =

P =

12. L = 6 ft , W = 17 ft

A =

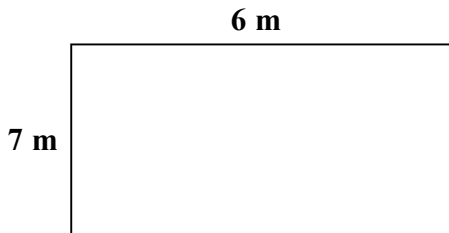
P =

Skill: Find the Area and Perimeter of a rectangle (Mixed)

Set #2A

Instructions: Find the perimeter and area of each rectangle and write your answers.

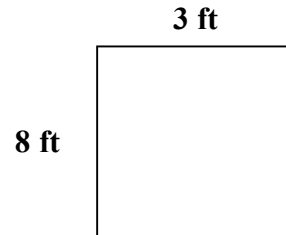
1.



$$A = 63 \text{ sq m}$$

$$P = 26 \text{ m}$$

2.



$$A = 24 \text{ sq ft}$$

$$P = 22 \text{ ft}$$

3. $L = 4 \text{ m}, W = 12 \text{ m}$

$$A = 48 \text{ sq m}$$

$$P = 32 \text{ m}$$

8. $L = 9 \text{ ft.}, W = 8 \text{ ft.}$

$$A = 72 \text{ sq ft}$$

$$P = 34 \text{ ft}$$

4. $L = 10 \text{ ft.}, W = 9 \text{ ft}$

$$A = 90 \text{ sq ft}$$

$$P = 38 \text{ ft}$$

9. $L = 16 \text{ m}, W = 15 \text{ m}$

$$A = 240 \text{ sq ft}$$

$$P = 62 \text{ ft}$$

5. $L = 8 \text{ cm}, W = 6 \text{ cm}$

$$A = 48 \text{ sq cm}$$

$$P = 28 \text{ cm}$$

10. $L = 3 \text{ cm}, W = 24 \text{ cm}$

$$A = 72 \text{ sq cm}$$

$$P = 54 \text{ in}$$

6. $L = 32 \text{ cm}, W = 15 \text{ cm}$

$$A = 480 \text{ sq cm}$$

$$P = 94 \text{ sq.}$$

11. $L = 11 \text{ cm}, W = 16 \text{ cm}$

$$A = 176 \text{ sq cm}$$

$$P = 54 \text{ cm}$$

7. $L = 26 \text{ ft}, W = 22 \text{ ft}$

$$A = 572 \text{ sq ft}$$

$$P = 96 \text{ ft}$$

12. $L = 6 \text{ ft}, W = 17 \text{ ft}$

$$A = 102 \text{ sq ft}$$


$$P = 46 \text{ ft}$$

Skill: Find the Area and Perimeter of a rectangle (Feet)

Set #3B

Instructions: Find the perimeter and area of each rectangle and write your answers.

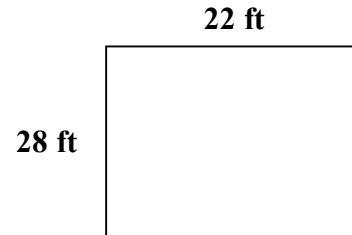
1.



A =

P =

2.



A =

P =

3. L = 6 ft , W = 5 ft

A =

P =

8. L = 21 ft. , W = 20 ft.

A =

P =

4. L = 27 ft , W = 2 ft

A =

P =

9. L = 19 ft , W = 33 ft

A =

P =

5. L = 10 ft, W = 13 ft

A =

P =

10. L = 26 ft , W = 8 ft

A =

P =

6. L = 33 ft , W = 6 ft

A =

P =

11. L = 14 ft , W = 7 ft

A =

P =

7. L = 11 ft , W = 28 ft

A =

P =

12. L = 30 ft , W = 16 ft

A =


P =

Skill: Find the Area and Perimeter of a rectangle (Feet)

Set #3B

Instructions: Find the perimeter and area of each rectangle and write your answers.

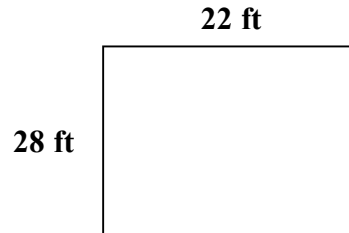
1.



$$A = 77 \text{ sq ft}$$

$$P = 36 \text{ ft}$$

2.



$$A = 616 \text{ sq ft}$$

$$P = 100 \text{ ft}$$

3. $L = 6 \text{ ft}, W = 5 \text{ ft}$

$$A = 30 \text{ sq ft}$$

$$P = 22 \text{ ft}$$

8. $L = 21 \text{ ft.}, W = 20 \text{ ft.}$

$$A = 420 \text{ sq ft}$$

$$P = 82 \text{ ft}$$

4. $L = 27 \text{ ft}, W = 2 \text{ ft}$

$$A = 54 \text{ sq ft}$$

$$P = 58 \text{ ft}$$

9. $L = 19 \text{ ft}, W = 33 \text{ ft}$

$$A = 627 \text{ sq ft}$$

$$P = 104 \text{ ft}$$

5. $L = 10 \text{ ft}, W = 13 \text{ ft}$

$$A = 130 \text{ sq ft}$$

$$P = 46 \text{ ft}$$

10. $L = 26 \text{ ft}, W = 8 \text{ ft}$

$$A = 208 \text{ sq ft}$$

$$P = 68 \text{ ft}$$

6. $L = 33 \text{ ft}, W = 6 \text{ ft}$

$$A = 198 \text{ sq ft}$$

$$P = 78 \text{ ft}$$

11. $L = 14 \text{ ft}, W = 7 \text{ ft}$

$$A = 98 \text{ sq ft}$$

$$P = 42 \text{ ft}$$

7. $L = 11 \text{ ft}, W = 28 \text{ ft}$

$$A = 308 \text{ sq ft}$$

$$P = 78 \text{ ft}$$

12. $L = 30 \text{ ft}, W = 16 \text{ ft}$

$$A = 480 \text{ sq ft}$$

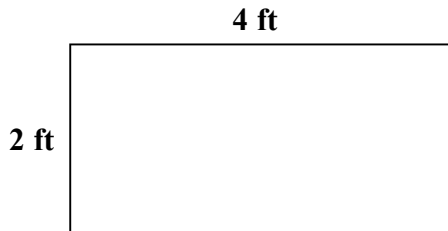
$$P = 92 \text{ ft}$$

Skill: Find the Area and Perimeter of a rectangle (Feet)

Set #4B

Instructions: Find the perimeter and area of each rectangle and write your answers.

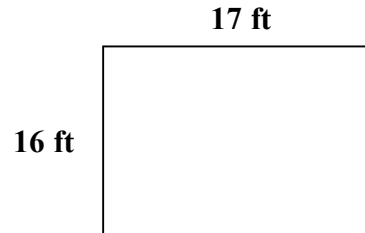
1.



A =

P =

2.



A =

P =

3. | L = 28 ft , W = 17 ft

A =

P =

8. | L = 24 ft. , W = 33 ft.

A =

P =

4. | L = 6 ft , W = 12 ft

A =

P =

9. | L = 5 ft , W = 19 ft

A =

P =

5. | L = 22 ft, W = 10 ft

A =

P =

10. | L = 9 ft , W = 15 ft

A =

P =

6. | L = 17 ft , W = 2 ft

A =

P =

11. | L = 11 ft , W = 11 ft

A =

P =

7. | L = 15 ft , W = 21 ft

A =

P =

12. | L = 10 ft , W = 39 ft

A =

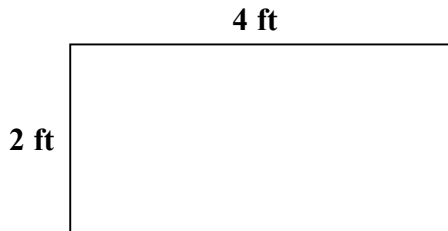
P =

Skill: Find the Area and Perimeter of a rectangle (Feet)

Set #4B

Instructions: Find the perimeter and area of each rectangle and write your answers.

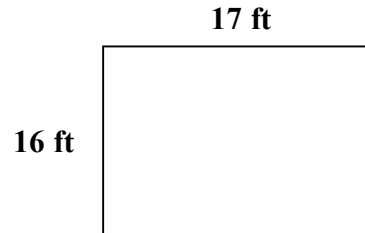
1.



$$A = 8 \text{ sq ft}$$

$$P = 12 \text{ ft}$$

2.



$$A = 272 \text{ sq ft}$$

$$P = 66 \text{ ft}$$

3. $L = 28 \text{ ft}, W = 17 \text{ ft}$

$$A = 476 \text{ sq ft}$$

$$P = 90 \text{ ft}$$

8. $L = 24 \text{ ft.}, W = 33 \text{ ft.}$

$$A = 792 \text{ sq ft}$$

$$P = 114 \text{ ft}$$

4. $L = 6 \text{ ft}, W = 12 \text{ ft}$

$$A = 72 \text{ sq ft}$$

$$P = 36 \text{ ft}$$

9. $L = 5 \text{ ft}, W = 19 \text{ ft}$

$$A = 95 \text{ sq ft}$$

$$P = 48 \text{ ft}$$

5. $L = 22 \text{ ft}, W = 10 \text{ ft}$

$$A = 220 \text{ sq ft}$$

$$P = 64 \text{ ft}$$

10. $L = 9 \text{ ft}, W = 15 \text{ ft}$

$$A = 135 \text{ sq ft}$$

$$P = 48 \text{ ft}$$

6. $L = 17 \text{ ft}, W = 2 \text{ ft}$

$$A = 34 \text{ sq ft}$$

$$P = 38 \text{ ft}$$

11. $L = 11 \text{ ft}, W = 11 \text{ ft}$

$$A = 121 \text{ sq ft}$$

$$P = 44 \text{ ft}$$

7. $L = 15 \text{ ft}, W = 21 \text{ ft}$

$$A = 315 \text{ sq ft}$$

$$P = 72 \text{ ft}$$

12. $L = 10 \text{ ft}, W = 39 \text{ ft}$

$$A = 39 \text{ sq ft}$$

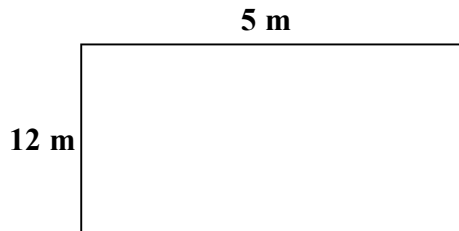
$$P = 98 \text{ ft}$$

Skill: Find the Area and Perimeter of a rectangle (Meters)

Set #5C

Instructions: Find the perimeter and area of each rectangle and write your answers.

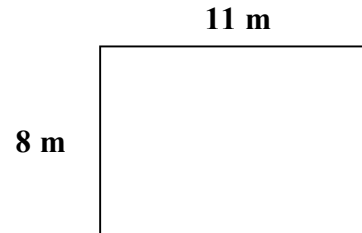
1.



A =

P =

2.



A =

P =

3. | L = 24m , W = 6 m

A =

P =

8. | L = 5 m. , W = 32 m.

A =

P =

4. | L = 4 m , W = 26 m

A =

P =

9. | L = 16 m , W = 13 m

A =

P =

5. | L = 19 m, W = 7 m

A =

P =

10. | L = 4 m , W = 23 m

A =

P =

6. | L = 23 m, W = 14 m

A =

P =

11. | L = 5 m , W = 18 m

A =

P =

7. | L = 13 m , W = 19 m

A =

P =

12. | L = 16 m , W = 27 m

A =

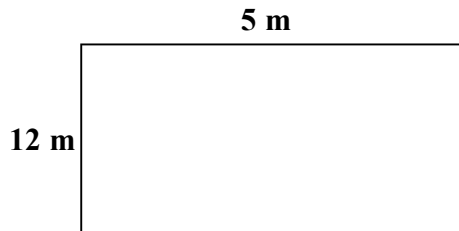
P =

Skill: Find the Area and Perimeter of a rectangle (Meters)

Set #5C

Instructions: Find the perimeter and area of each rectangle and write your answers.

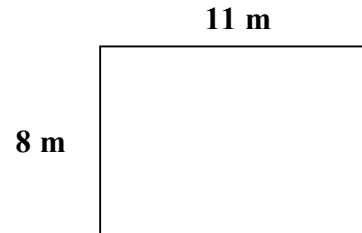
1.



$$A = 60 \text{ sq m}$$

$$P = 34 \text{ m}$$

2.



$$A = 88 \text{ sq m}$$

$$P = 38 \text{ m}$$

3. $L = 24\text{m} , W = 6 \text{ m}$

$$A = 144 \text{ sq m}$$

$$P = 60 \text{ m}$$

8. $L = 5 \text{ m} , W = 32 \text{ m}$

$$A = 160 \text{ sq m}$$

$$P = 74 \text{ m}$$

4. $L = 4 \text{ m} , W = 26 \text{ m}$

$$A = 104 \text{ sq m}$$

$$P = 60 \text{ m}$$

9. $L = 16 \text{ m} , W = 13 \text{ m}$

$$A = 208 \text{ sq m}$$

$$P = 58 \text{ m}$$

5. $L = 19 \text{ m} , W = 7 \text{ m}$

$$A = 133 \text{ sq m}$$

$$P = 52 \text{ m}$$

10. $L = 4 \text{ m} , W = 23 \text{ m}$

$$A = 92 \text{ sq m}$$

$$P = 54 \text{ m}$$

6. $L = 23 \text{ m} , W = 14 \text{ m}$

$$A = 322 \text{ sq m}$$

$$P = 74 \text{ m}$$

11. $L = 5 \text{ m} , W = 18 \text{ m}$

$$A = 90 \text{ sq m}$$

$$P = 46 \text{ m}$$

7. $L = 13 \text{ m} , W = 19 \text{ m}$

$$A = 247 \text{ sq m}$$

$$P = 64 \text{ m}$$

12. $L = 16 \text{ m} , W = 27 \text{ m}$

$$A = 432 \text{ sq m}$$

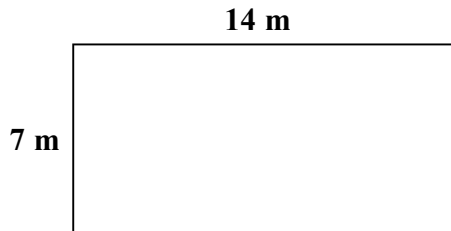
$$P = 86 \text{ m}$$

Skill: Find the Area and Perimeter of a rectangle (Meters)

Set #6D

Instructions: Find the perimeter and area of each rectangle and write your answers.

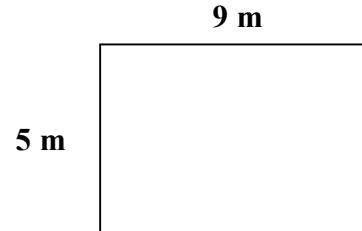
1.



A =

P =

2.



A =

P =

3. | L = 24 m , W = 7 m

A =

P =

8. | L = 11 m , W = 21 m.

A =

P =

4. | L = 29 m , W = 11 m

A =

P =

9. | L = 13 m , W = 18 m

A =

P =

5. | L = 14 m , W = 9 m

A =

P =

10. | L = 13 m , W = 6 m

A =

P =

6. | L = 27 m , W = 18 m

A =

P =

11. | L = 7 m , W = 24 m

A =

P =

7. | L = 23 m , W = 14 m

A =

P =

12. | L = 6 m , W = 32 m

A =

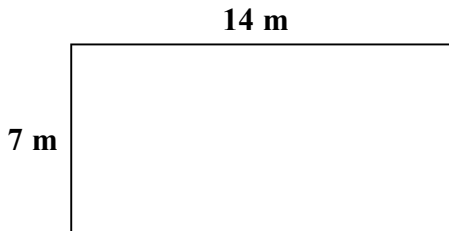
P =

Skill: Find the Area and Perimeter of a rectangle (Meters)

Set #6D

Instructions: Find the perimeter and area of each rectangle and write your answers.

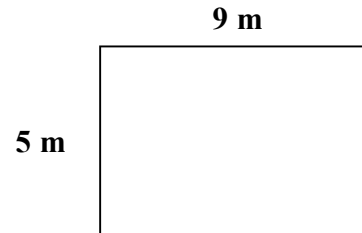
1.



$$A = 98 \text{ sq m}$$

$$P = 42 \text{ m}$$

2.



$$A = 45 \text{ sq m}$$

$$P = 28 \text{ m}$$

3. $L = 24 \text{ m}, W = 7 \text{ m}$

$$A = 168 \text{ sq m}$$

$$P = 62 \text{ m}$$

8. $L = 11 \text{ m}, W = 21 \text{ m}$

$$A = 231 \text{ sq m}$$

$$P = 64 \text{ m}$$

4. $L = 29 \text{ m}, W = 11 \text{ m}$

$$A = 319 \text{ sq m}$$

$$P = 80 \text{ m}$$

9. $L = 13 \text{ m}, W = 18 \text{ m}$

$$A = 234 \text{ sq m}$$

$$P = 62 \text{ m}$$

5. $L = 14 \text{ m}, W = 9 \text{ m}$

$$A = 126 \text{ sq m}$$

$$P = 46 \text{ m}$$

10. $L = 13 \text{ m}, W = 6 \text{ m}$

$$A = 96 \text{ sq m}$$

$$P = 38 \text{ m}$$

6. $L = 27 \text{ m}, W = 18 \text{ m}$

$$A = 486 \text{ sq m}$$

$$P = 90 \text{ m}$$

11. $L = 7 \text{ m}, W = 24 \text{ m}$

$$A = 168 \text{ sq m}$$

$$P = 62 \text{ m}$$

7. $L = 23 \text{ m}, W = 14 \text{ m}$

$$A = 322 \text{ sq m}$$

$$P = 74 \text{ m}$$

12. $L = 6 \text{ m}, W = 32 \text{ m}$

$$A = 192 \text{ sq m}$$

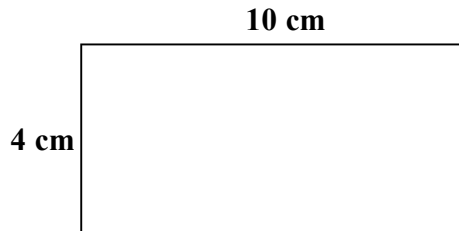
$$P = 76 \text{ m}$$

Skill: Find the Area and Perimeter of a rectangle (Centimeters)

Set #7E

Instructions: Find the perimeter and area of each rectangle and write your answers.

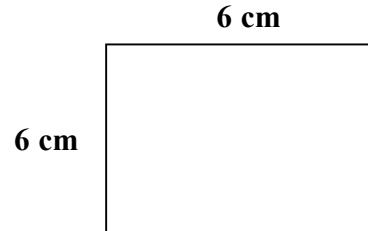
1.



A =

P = .

2.



A =

P =

3. | L = 17 cm, W = 8 cm

| A =

| P =

8. | L = 13 cm, W = 11 cm.

| A =

| P =

4. | L = 16 cm, W = 27 cm

| A =

| P =

9. | L = 9 cm, W = 23 cm

| A =

| P =

5. | L = 26 cm, W = 17 cm

| A =

| P =

10. | L = 22 cm, W = 9 cm

| A =

| P =

6. | L = 15 cm, W = 25 cm

| A =

| P =

11. | L = 14 cm, W = 31 cm

| A =

| P =

7. | L = 19 cm, W = 19 cm

| A =

| P =

12. | L = 31 cm, W = 30 cm

| A =

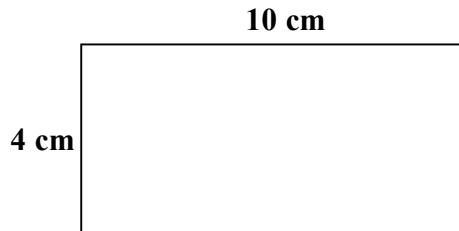
| P =

Skill: Find the Area and Perimeter of a rectangle (Centimeters)

Set #7E

Instructions: Find the perimeter and area of each rectangle and write your answers.

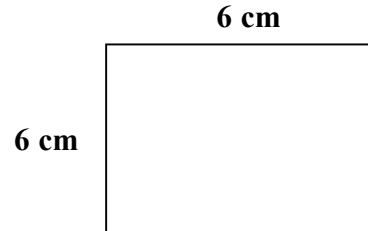
1.



$$A = 40 \text{ sq cm}$$

$$P = 28 \text{ cm}$$

2.



$$A = 36 \text{ sq cm}$$

$$P = 24 \text{ cm}$$

3. $L = 13 \text{ cm}, W = 8 \text{ cm}$

$$A = 136 \text{ sq cm}$$

$$P = 50 \text{ cm}$$

8. $L = 13 \text{ cm}, W = 11 \text{ cm}.$

$$A = 143 \text{ sq cm}$$

$$P = 48 \text{ cm}$$

4. $L = 16 \text{ cm}, W = 27 \text{ cm}$

$$A = 432 \text{ sq cm}$$

$$P = 86 \text{ cm}$$

9. $L = 9 \text{ cm}, W = 23 \text{ cm}$

$$A = 207 \text{ sq cm}$$

$$P = 43 \text{ cm}$$

5. $L = 26 \text{ cm}, W = 17 \text{ cm}$

$$A = 442 \text{ sq cm}$$

$$P = 86 \text{ cm}$$

10. $L = 22 \text{ cm}, W = 9 \text{ cm}$

$$A = 198 \text{ sq cm}$$

$$P = 62 \text{ cm}$$

6. $L = 15 \text{ cm}, W = 25 \text{ cm}$

$$A = 375 \text{ sq cm}$$

$$P = 80 \text{ cm}$$

11. $L = 14 \text{ cm}, W = 31 \text{ cm}$

$$A = 434 \text{ sq cm}$$

$$P = 90 \text{ cm}$$

7. $L = 19 \text{ cm}, W = 19 \text{ cm}$

$$A = 361 \text{ sq cm}$$

$$P = 76 \text{ cm}$$

12. $L = 31 \text{ cm}, W = 30 \text{ cm}$

$$A = 930 \text{ sq cm}$$

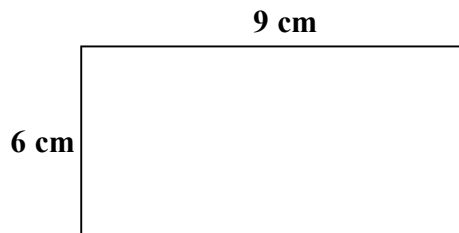
$$P = 122 \text{ cm}$$

Skill: Find the Area and Perimeter of a rectangle (Centimeters)

Set #8F

Instructions: Find the perimeter and area of each rectangle and write your answers.

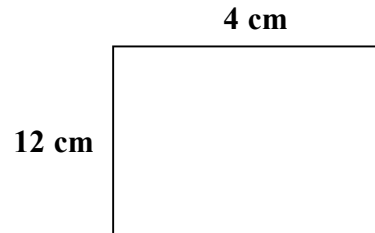
1.



A =

P =

2.



A =

P =

3. L = 17 cm, W = 4 cm

A =

P =

8. L = 6 cm, W = 17 cm.

A =

P =

4. L = 4 cm, W = 21 cm

A =

P =

9. L = 22 cm, W = 12 cm

A =

P =

5. L = 12 cm, W = 9 cm

A =

P =

10. L = 18 cm, W = 16 cm

A =

P =

6. L = 25 cm, W = 23 cm

A =

P =

11. L = 8 cm, W = 14 cm

A =

P =

7. L = 14 cm, W = 16 cm

A =

P =

12. L = 4 cm, W = 23 cm

A =

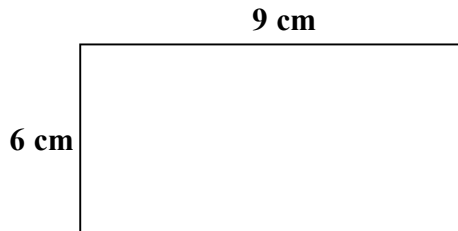
P =

Skill: Find the Area and Perimeter of a rectangle (Centimeters)

Set #8F

Instructions: Find the perimeter and area of each rectangle and write your answers.

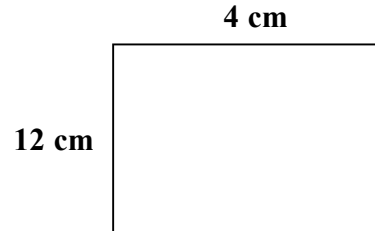
1.



$$A = 64 \text{ sq cm}$$

$$P = 30 \text{ cm}$$

2.



$$A = 48 \text{ sq cm}$$

$$P = 32 \text{ cm}$$

3. $L = 17 \text{ cm}, W = 4 \text{ cm}$

$$A = 68 \text{ sq cm}$$

$$P = 42 \text{ cm}$$

8. $L = 6 \text{ cm}, W = 17 \text{ cm}.$

$$A = 102 \text{ sq cm}$$

$$P = 46 \text{ cm}$$

4. $L = 4 \text{ cm}, W = 21 \text{ cm}$

$$A = 84 \text{ sq cm}$$

$$P = 50 \text{ cm}$$

9. $L = 22 \text{ cm}, W = 12 \text{ cm}$

$$A = 264 \text{ sq cm}$$

$$P = 68 \text{ cm}$$

5. $L = 12 \text{ cm}, W = 9 \text{ cm}$

$$A = 108 \text{ sq cm}$$

$$P = 42 \text{ cm}$$

10. $L = 18 \text{ cm}, W = 16 \text{ cm}$

$$A = 288 \text{ sq cm}$$

$$P = 68 \text{ cm}$$

6. $L = 25 \text{ cm}, W = 23 \text{ cm}$

$$A = 575 \text{ sq cm}$$

$$P = 96 \text{ cm}$$

11. $L = 8 \text{ cm}, W = 14 \text{ cm}$

$$A = 112 \text{ sq cm}$$

$$P = 44 \text{ cm}$$

7. $L = 14 \text{ cm}, W = 16 \text{ cm}$

$$A = 224 \text{ sq cm}$$

$$P = 60 \text{ cm}$$

12. $L = 4 \text{ cm}, W = 23 \text{ cm}$

$$A = 92 \text{ sq cm}$$


$$P = 54 \text{ cm}$$

Skill: Find the Area and Perimeter of a rectangle (Inches)

Set #9G

Instructions: Find the perimeter and area of each rectangle and write your answers.


1.



A =

P =

2.



A =

P =

3. L = 9 in., W = 17 in.

A =

P =

8. L = 18 in., W = 11 in.

A =

P =

4. L = 15 in., W = 10 in.

A =

P =

9. L = 26 in., W = 16 in.

A =

P =

5. L = 13 in., W = 12 in.

A =

P =

10. L = 7 in., W = 30 in.

A =

P =

6. L = 19 in., W = 14 in.

A =

P =

11. L = 24 in., W = 10 in.

A =

P =

7. L = 17 cm, W = 29 cm

A =

P =

12. L = 7 in., W = 26 in.

A =


P =

Skill: Find the Area and Perimeter of a rectangle (Inches)

Set #9G

Instructions: Find the perimeter and area of each rectangle and write your answers.


1.



$$A = 32 \text{ sq in.}$$

$$P = 24 \text{ in.}$$

2.



$$A = 26 \text{ sq in.}$$

$$P = 52 \text{ in.}$$

3. $L = 9 \text{ in.}, W = 17 \text{ in.}$

$$A = 153 \text{ sq in.}$$

$$P = 52 \text{ in.}$$

8. $L = 18 \text{ in.}, W = 11 \text{ in.}$

$$A = 198 \text{ sq in.}$$

$$P = 58 \text{ in.}$$

4. $L = 15 \text{ in.}, W = 10 \text{ in.}$

$$A = 150 \text{ sq cm}$$

$$P = 50 \text{ cm}$$

9. $L = 26 \text{ in.}, W = 16 \text{ in.}$

$$A = 416 \text{ sq in.}$$

$$P = 84 \text{ in.}$$

5. $L = 13 \text{ in.}, W = 12 \text{ in.}$

$$A = 156 \text{ sq in.}$$

$$P = 50 \text{ in.}$$

10. $L = 7 \text{ in.}, W = 30 \text{ in.}$

$$A = 210 \text{ sq in.}$$

$$P = 74 \text{ in.}$$

6. $L = 19 \text{ in.}, W = 14 \text{ in.}$

$$A = 266 \text{ sq in.}$$

$$P = 66 \text{ in.}$$

11. $L = 24 \text{ in.}, W = 10 \text{ in.}$

$$A = 240 \text{ sq in.}$$

$$P = 68 \text{ in.}$$

7. $L = 17 \text{ cm}, W = 29 \text{ cm}$

$$A = 493 \text{ sq in.}$$

$$P = 92 \text{ in.}$$

12. $L = 7 \text{ in.}, W = 26 \text{ in.}$

$$A = 182 \text{ sq in.}$$


$$P = 66 \text{ in.}$$

Skill: Find the Area and Perimeter of a rectangle (Inches)

Set #10H

Instructions: Find the perimeter and area of each rectangle and write your answers.

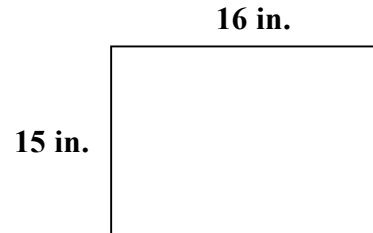
1.



A =

P =

2.



A =

P =

3. | L = 16 in., W = 9 in.

A =

P =

8. | L = 7 in., W = 18 in.

A =

P =

4. | L = 22 in., W = 6 in.

A =

P =

9. | L = 4 in., W = 27 in.

A =

P =

5. | L = 26 in., W = 14 in.

A =

P =

10. | L = 16 in., W = 19 in.

A =

P = .

6. | L = 6 in., W = 7 in.

A =

P =

11. | L = 14 in., W = 20 in.

A =

P =

7. | L = 9 cm, W = 23 cm

A =

P =

12. | L = 9 in., W = 9 in.

A =


P =

Skill: Find the Area and Perimeter of a rectangle (Inches)

Set #10H

Instructions: Find the perimeter and area of each rectangle and write your answers.

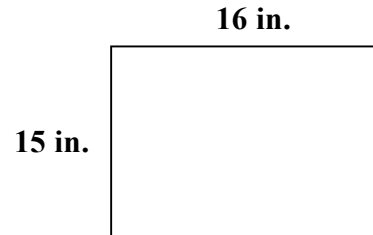
1.



$$A = 91 \text{ sq in.}$$

$$P = 40 \text{ in.}$$

2.



$$A = 240 \text{ sq in.}$$

$$P = 62 \text{ in.}$$

3. $L = 16 \text{ in.}, W = 9 \text{ in.}$

$$A = 144 \text{ sq in.}$$

$$P = 50 \text{ in.}$$

8. $L = 7 \text{ in.}, W = 18 \text{ in.}$

$$A = 126 \text{ sq in.}$$

$$P = 50 \text{ in.}$$

4. $L = 22 \text{ in.}, W = 6 \text{ in.}$

$$A = 132 \text{ sq cm}$$

$$P = 56 \text{ cm}$$

9. $L = 4 \text{ in.}, W = 27 \text{ in.}$

$$A = 108 \text{ sq in.}$$

$$P = 62 \text{ in.}$$

5. $L = 26 \text{ in.}, W = 14 \text{ in.}$

$$A = 364 \text{ sq in.}$$

$$P = 80 \text{ in.}$$

10. $L = 16 \text{ in.}, W = 19 \text{ in.}$

$$A = 304 \text{ sq in.}$$

$$P = 70 \text{ in.}$$

6. $L = 6 \text{ in.}, W = 7 \text{ in.}$

$$A = 42 \text{ sq in.}$$

$$P = 26 \text{ in.}$$

11. $L = 14 \text{ in.}, W = 20 \text{ in.}$

$$A = 280 \text{ sq in.}$$

$$P = 68 \text{ in.}$$

7. $L = 9 \text{ cm}, W = 23 \text{ cm}$

$$A = 207 \text{ sq in.}$$

$$P = 64 \text{ in.}$$

12. $L = 9 \text{ in.}, W = 9 \text{ in.}$

$$A = 81 \text{ sq in.}$$

$$P = 36 \text{ in.}$$