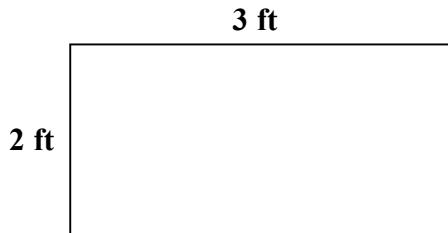


Skill: Find the Area and Perimeter of a rectangle (Mixed)

Set #1A

Instructions: Find the perimeter and area of each rectangle and write your answers.

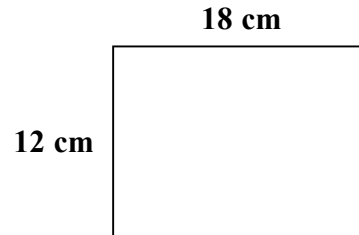
1.



A =

P =

2.



A =

P =

3. L = 10 cm , W = 16 cm

A =

P =

8. L = 36 cm , W = 7 cm

A =

P =

4. L = 13 cm , W = 28 cm

A =

P =

9. L = 12 ft , W = 43 ft

A =

P =

5. L = 11 m , W = 12 m

A =

P =

10. L = 7 cm , W = 48 cm

A =

P =

6. L = 36 cm , W = 15 cm

A =

P =

11. L = 18 m , W = 12 m

A =

P =

7. L = 32 cm , W = 32 cm

A =

P =

12. L = 26 ft , W = 37 ft

A =

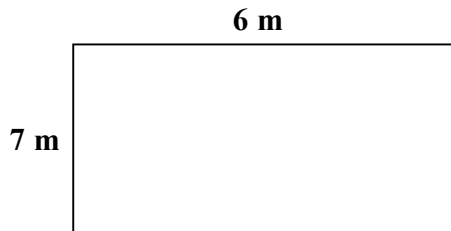
P =

Skill: Find the Area and Perimeter of a rectangle (Mixed)

Set #2A

Instructions: Find the perimeter and area of each rectangle and write your answers.

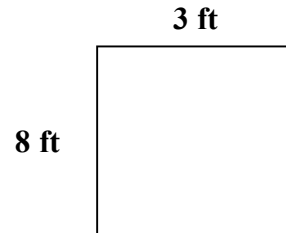
1.



A =

P =

2.



A =

P =

3. L = 4 m , W = 12 m

A =

P =

8. L = 9 ft. , W = 8 ft.

A =

P =

4. L = 10 ft. , W = 9 ft

A =

P =

9. L = 16 m , W = 15 m

A =

P =

5. L = 8 cm , W = 6 cm

A =

P =

10. L = 3 cm , W = 24 cm

A =

P =

6. L = 32 cm , W = 15 cm

A =

P =

11. L = 11 cm , W = 16cm

A =

P =

7. L = 26 ft , W = 22 ft

A =

P =

12. L = 6 ft , W = 17 ft

A =


P =

Skill: Find the Area and Perimeter of a rectangle (Feet)

Set #3B

Instructions: Find the perimeter and area of each rectangle and write your answers.

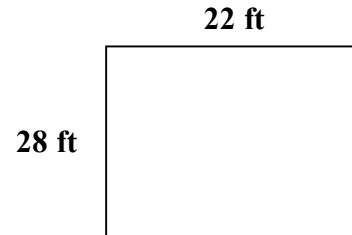
1.



A =

P =

2.



A =

P =

3. L = 6 ft , W = 5 ft

A =

P =

8. L = 21 ft. , W = 20 ft.

A =

P =

4. L = 27 ft , W = 2 ft

A =

P =

9. L = 19 ft , W = 33 ft

A =

P =

5. L = 10 ft, W = 13 ft

A =

P =

10. L = 26 ft , W = 8 ft

A =

P =

6. L = 33 ft , W = 6 ft

A =

P =

11. L = 14 ft , W = 7 ft

A =

P =

7. L = 11 ft , W = 28 ft

A =

P =

12. L = 30 ft , W = 16 ft

A =

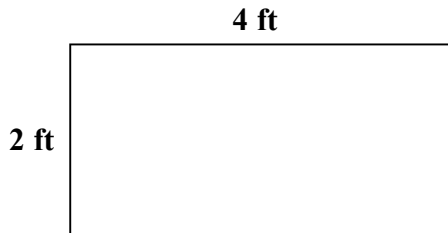
P =

Skill: Find the Area and Perimeter of a rectangle (Feet)

Set #4B

Instructions: Find the perimeter and area of each rectangle and write your answers.

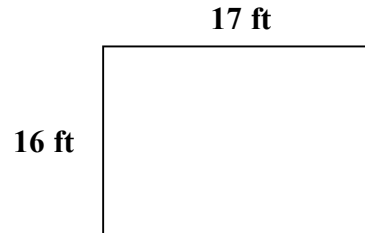
1.



A =

P =

2.



A =

P =

3. L = 28 ft , W = 17 ft

A =

P =

8. L = 24 ft. , W = 33 ft.

A =

P =

4. L = 6 ft , W = 12 ft

A =

P =

9. L = 5 ft , W = 19 ft

A =

P =

5. L = 22 ft, W = 10 ft

A =

P =

10. L = 9 ft , W = 15 ft

A =

P =

6. L = 17 ft , W = 2 ft

A =

P =

11. L = 11 ft , W = 11 ft

A =

P =

7. L = 15 ft , W = 21 ft

A =

P =

12. L = 10 ft , W = 39 ft

A =

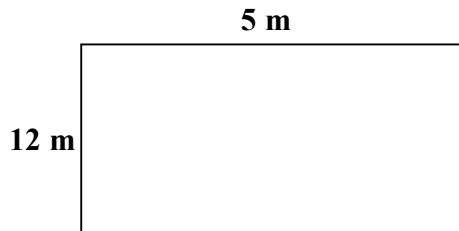
P =

Skill: Find the Area and Perimeter of a rectangle (Meters)

Set #5C

Instructions: Find the perimeter and area of each rectangle and write your answers.

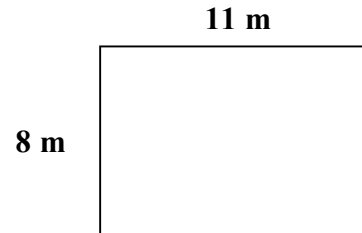
1.



A =

P =

2.



A =

P =

3. | L = 24m , W = 6 m

A =

P =

8. | L = 5 m , W = 32 m.

A =

P =

4. | L = 4 m , W = 26 m

A =

P =

9. | L = 16 m , W = 13 m

A =

P =

5. | L = 19 m , W = 7 m

A =

P =

10. | L = 4 m , W = 23 m

A =

P =

6. | L = 23 m , W = 14 m

A =

P =

11. | L = 5 m , W = 18 m

A =

P =

7. | L = 13 m , W = 19 m

A =

P =

12. | L = 16 m , W = 27 m

A =

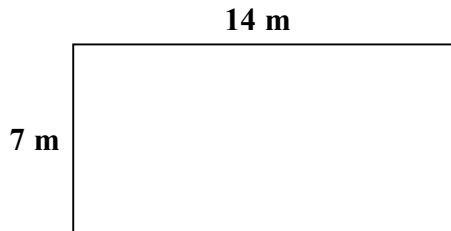
P =

Skill: Find the Area and Perimeter of a rectangle (Meters)

Set #6D

Instructions: Find the perimeter and area of each rectangle and write your answers.

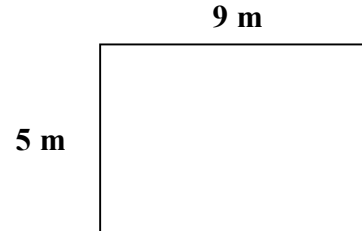
1.



A =

P =

2.



A =

P =

3. | L = 24 m , W = 7 m

A =

P =

8. | L = 11 m , W = 21 m.

A =

P =

4. | L = 29 m , W = 11 m

A =

P =

9. | L = 13 m , W = 18 m

A =

P =

5. | L = 14 m , W = 9 m

A =

P =

10. | L = 13 m , W = 6 m

A =

P =

6. | L = 27 m , W = 18 m

A =

P =

11. | L = 7 m , W = 24 m

A =

P =

7. | L = 23 m , W = 14 m

A =

P =

12. | L = 6 m , W = 32 m

A =

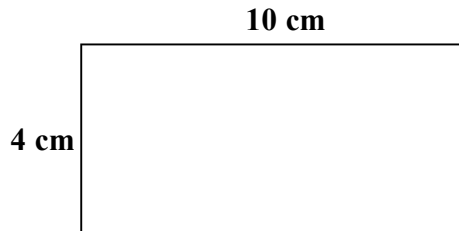
P =

Skill: Find the Area and Perimeter of a rectangle (Centimeters)

Set #7E

Instructions: Find the perimeter and area of each rectangle and write your answers.

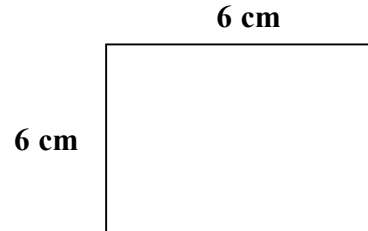
1.



A =

P = .

2.



A =

P =

3. | L = 17 cm, W = 8 cm

A =

P =

8. | L = 13 cm, W = 11 cm.

A =

P =

4. | L = 16 cm, W = 27 cm

A =

P =

9. | L = 9 cm, W = 23 cm

A =

P =

5. | L = 26 cm, W = 17 cm

A =

P =

10. | L = 22 cm, W = 9 cm

A =

P =

6. | L = 15 cm, W = 25 cm

A =

P =

11. | L = 14 cm, W = 31 cm

A =

P =

7. | L = 19 cm, W = 19 cm

A =

P =

12. | L = 31 cm, W = 30 cm

A =

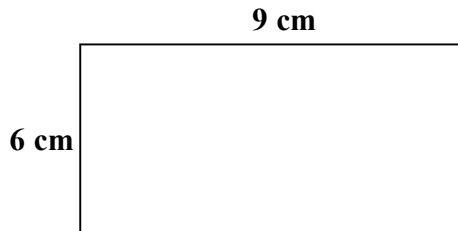
P =

Skill: Find the Area and Perimeter of a rectangle (Centimeters)

Set #8F

Instructions: Find the perimeter and area of each rectangle and write your answers.

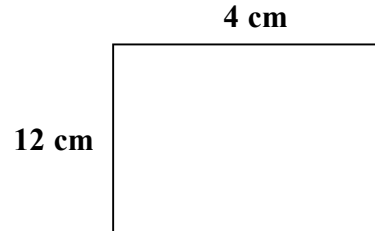
1.



A =

P =

2.



A =

P =

3. L = 17 cm, W = 4 cm

A =

P =

8. L = 6 cm, W = 17 cm.

A =

P =

4. L = 4 cm, W = 21 cm

A =

P =

9. L = 22 cm, W = 12 cm

A =

P =

5. L = 12 cm, W = 9 cm

A =

P =

10. L = 18 cm, W = 16 cm

A =

P =

6. L = 25 cm, W = 23 cm

A =

P =

11. L = 8 cm, W = 14 cm

A =

P =

7. L = 14 cm, W = 16 cm

A =

P =

12. L = 4 cm, W = 23 cm

A =


P =

Skill: Find the Area and Perimeter of a rectangle (Inches)

Set #9G

Instructions: Find the perimeter and area of each rectangle and write your answers.


1.



A =

P =

2.



A =

P =

3. L = 9 in., W = 17 in.

A =

P =

8. L = 18 in., W = 11 in.

A =

P =

4. L = 15 in., W = 10 in.

A =

P =

9. L = 26 in., W = 16 in.

A =

P =

5. L = 13 in., W = 12 in.

A =

P =

10. L = 7 in., W = 30 in.

A =

P =

6. L = 19 in., W = 14 in.

A =

P =

11. L = 24 in., W = 10 in.

A =

P =

7. L = 17 cm, W = 29 cm

A =

P =

12. L = 7 in., W = 26 in.

A =


P =

Skill: Find the Area and Perimeter of a rectangle (Inches)

Set #10H

Instructions: Find the perimeter and area of each rectangle and write your answers.

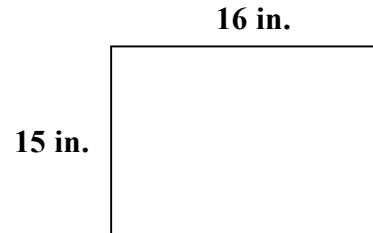
1.



A =

P =

2.



A =

P =

3. L = 16 in., W = 9 in.

A =

P =

8. L = 7 in., W = 18 in.

A =

P =

4. L = 22 in., W = 6 in.

A =

P =

9. L = 4 in., W = 27 in.

A =

P =

5. L = 26 in., W = 14 in.

A =

P =

10. L = 16 in., W = 19 in.

A =

P = .

6. L = 6 in., W = 7 in.

A =

P =

11. L = 14 in., W = 20 in.

A =

P =

7. L = 9 cm, W = 23 cm

A =

P =

12. L = 9 in., W = 9 in.

A =

P =